


Robbinsville High School
Mathematics Department
155 Robbinsville-Edinburg Road
Robbinsville NJ 08691

Dear Students,

Welcome to Geometry! Attached you will find a summer packet for math reinforcement for the upcoming 2019-2020 school year. This packet should be completed and returned to school on the *first full day of school*. September is filled with review, but with completion of this packet, the review will come very naturally. The packet will be *collected* and *graded* as a **20-point homework grade** based on *completion* and *effort*.

To assist in your review and completion of this packet there are videos corresponding to each section of this packet. The videos are linked into this packet using QR codes that look like this:  In order to view the videos, simply download a QR scanner to your phone, use the scanner to scan the code, and that will directly link you to each video.

If you find yourself still confused on certain topics, it is suggested that you search for the topic on one of the following websites:

- ShowMe <http://www.showme.com>
- Khan Academy: <http://www.khanacademy.org/Math>
- Math TV: <http://www.mathtv.com>

We look forward to teaching you and getting to know you next year.

Have a great summer!

Robbinsville High School Mathematics Department

Name _____

Due Date: The first day back in your Geometry Class!

Directions: You must also show all work in the space provided to receive credit. Write your final answer on the line.

Part 1: Algebra 1 Skills**Solve by Distribution:**

1. $-3(x + 5) = 8x + 18$

1. _____

2. $4(8 - p) - (7 - p) = 22$

2. _____

3. $5(x - 4) - 1 = -7x + 3$

3. _____

4. $10(v + 5) = 10v + 50$

4. _____

Solve by Cross Multiplication:

5. $\frac{x+1}{-3} = \frac{x-4}{5}$

5. _____

6. $\frac{5}{x-1} = \frac{7}{x}$

6. _____

Solve by Factoring:



7. $x^2 - 16x + 64 = 0$

7. _____

8. $2x^2 = 9x + 5$

8. _____

Solve by Factoring Two Perfect Squares:



9. $25y^2 - 49 = 0$

9. _____

10. $16x^4 - 121x^2 = 0$

10. _____

Solve by Using the Greatest Common Factor:



11. $2x^4 - 12x^2 = 0$

11. _____

12. $3xy - 15y = 0$

12. _____

Solve by Using the Quadratic Formula: (Round to the nearest tenth)



13. $x^2 - 10x + 5 = 0$

13. _____

14. $x^2 - 3x - 11 = 0$

14. _____

Solve by Using the Quadratic Formula: (Round to the nearest hundredth)

15. $x^2 - 2x + 2 = 0$

15. _____

16. $4x^2 + 6x - 1 = 0$

16. _____

Simplify:



17. $(2x^2 + 11xy - 10) + (3x^2 - 4x + 2) + (-x^2 - y - 4)$

17. _____

18. $(2x^2 + 5x - x^3 + 1) - (9x^2 - 8x - x^3 + 7)$

18. _____



19. $(4a + 5c)(4a - 5c)$

19. _____

20. $(w - 2)^2$

20. _____

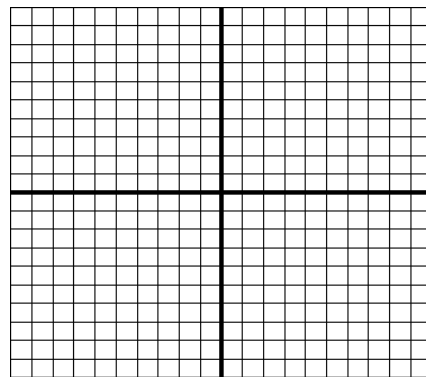
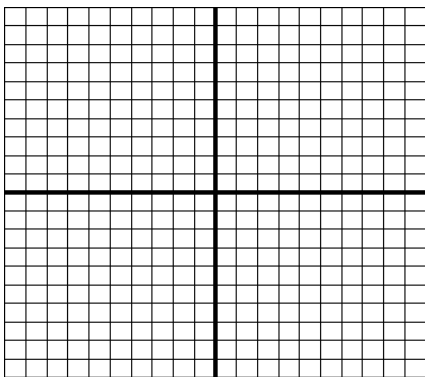
21. $(q + 3)^3$

21. _____



22. $y = -3x + 5$

23. $y = \frac{3}{4}x - 2$



Find the Slope.



24. Find the slope of the line containing points (9, 4) and (5, 2)

24. _____

25. Find the slope of the line containing points (-2, 3) and (8, -15)

25. _____

Word Problems: Set up and solve proportions. If necessary, then round answer to the nearest tenth.

26. After 2 hours I had finished watching 5 episodes of my favorite show on Netflix. At that rate how long would it take me to watch 15 episodes?

26. _____



27. The ratio of boy to girl students at a certain school is 17:23. If there are 300 total students at that school how many boys attend that school?

27. _____



28. Suppose the model of a PS4 has a length of 50 mm and we know the actual length of the PS4 is 275 mm.

What is the scale of the model?

28. _____

29. The blueprint of a skateboard ramp shows the length is 11.4 inches. If the scale on the blueprint is 1 inch = 6 feet, find the length of the actual skateboard ramp using a scale factor.

29. _____

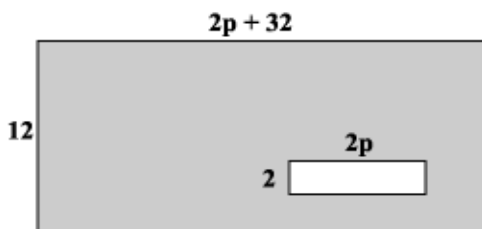
Part 2: Geometry Skills

Solve for the missing variable in each figure:

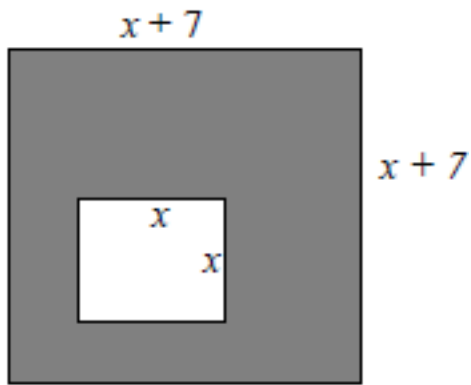
30. What is the simplified expression for the area of the shaded region in the larger of these two rectangles?



30. _____

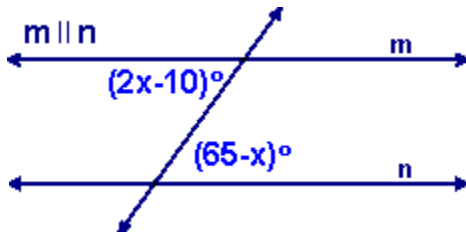


31. What is the simplified expression for the area of the shaded region in the larger of these two rectangles?



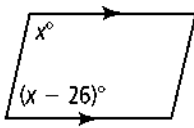
31. _____

32.



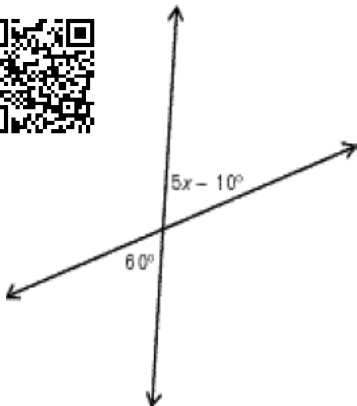
32. _____

33.



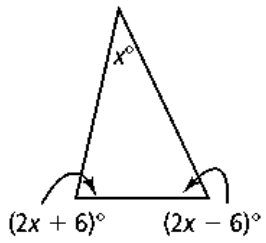
33. _____

34.



34. _____

35.



35. _____

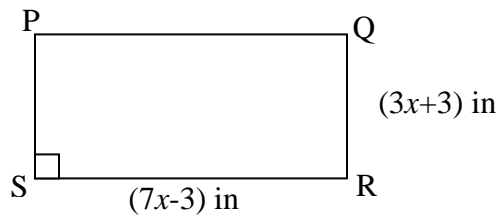
36. If the perimeter of rectangle PQRS is 40 inches.

a) Find the value of x .

b) Find the Area of the rectangle.

36a. _____

36b. _____



37. Given the figure below in which \overleftrightarrow{AB} and \overleftrightarrow{CD} intersect at point X and $m\angle 5 = 90^\circ$. Refer to angles by numbers in answering.



a) Name a pair of vertical angles.

b) Is $\angle 1$ vertical to $\angle 2$? Explain.

c) Name an angle adjacent to $\angle 2$.

d) Are $\angle 3$ and $\angle 5$ supplementary?

e) Are $\angle 2$ and $\angle 4$ supplementary?

f) Explain why $\angle 3$ and $\angle 1$ are complementary.

